

# LESSON 4

---

---

Write numbers 151-200.

151				
				200

Circle the largest number.

152	150	153	171	170	169	181	118	108
118	125	115	160	151	140	116	119	117
144	134	141	103	110	113	130	136	116
159	158	163	114	124	104	169	149	159

Answer these facts. Write the twin fact.

$\begin{array}{r} 1 \\ + 2 \\ \hline \end{array}$	$\begin{array}{r} 1 \\ + 3 \\ \hline \end{array}$	$\begin{array}{r} 2 \\ + 3 \\ \hline \end{array}$	$\begin{array}{r} 4 \\ + 1 \\ \hline \end{array}$	$\begin{array}{r} 5 \\ + 1 \\ \hline \end{array}$
$\begin{array}{r} 2 \\ + 4 \\ \hline \end{array}$	$\begin{array}{r} 2 \\ + 1 \\ \hline \end{array}$	$\begin{array}{r} 3 \\ + 2 \\ \hline \end{array}$	$\begin{array}{r} 4 \\ + 2 \\ \hline \end{array}$	$\begin{array}{r} 1 \\ + 4 \\ \hline \end{array}$
$\begin{array}{r} 3 \\ + 1 \\ \hline \end{array}$	$\begin{array}{r} 1 \\ + 5 \\ \hline \end{array}$	$\begin{array}{r} 1 \\ + 2 \\ \hline \end{array}$	$\begin{array}{r} 2 \\ + 3 \\ \hline \end{array}$	$\begin{array}{r} 2 \\ + 4 \\ \hline \end{array}$

Look at each whole number and its parts. Write each fact three times.

⑦ 1 6

⑦ 2 5

⑦ 3 4

+     +     +

+     +     +

+     +     +

⑦ 4 3

⑦ 5 2

⑦ 6 1

+     +     +

+     +     +

+     +     +

Write the numbers that come after.

111 \_\_\_\_\_

108 \_\_\_\_\_

101 \_\_\_\_\_

167 \_\_\_\_\_

119 \_\_\_\_\_

148 \_\_\_\_\_

171 \_\_\_\_\_

126 \_\_\_\_\_

163 \_\_\_\_\_

120 \_\_\_\_\_

134 \_\_\_\_\_













185 \_\_\_\_\_

145 \_\_\_\_\_

152 \_\_\_\_\_

197 \_\_\_\_\_

Write the time.



Fill in the missing numbers for each fact:

$\begin{array}{r} 1 \\ + \quad \bigcirc \\ \hline 7 \end{array}$	$\begin{array}{r} \bigcirc \\ + 5 \\ \hline 6 \end{array}$	$\begin{array}{r} 3 \\ + 4 \\ \hline \bigcirc \end{array}$	$\begin{array}{r} 3 \\ + \bigcirc \\ \hline 6 \end{array}$	$\begin{array}{r} \bigcirc \\ + 1 \\ \hline 7 \end{array}$	$\begin{array}{r} 2 \\ + 3 \\ \hline \bigcirc \end{array}$	$\begin{array}{r} 3 \\ + \bigcirc \\ \hline 7 \end{array}$
$\begin{array}{r} 2 \\ + \bigcirc \\ \hline 6 \end{array}$	$\begin{array}{r} 2 \\ + 5 \\ \hline \bigcirc \end{array}$	$\begin{array}{r} \bigcirc \\ + 3 \\ \hline 5 \end{array}$	$\begin{array}{r} 2 \\ + \bigcirc \\ \hline 7 \end{array}$	$\begin{array}{r} 5 \\ + 2 \\ \hline \bigcirc \end{array}$	$\begin{array}{r} 4 \\ + \bigcirc \\ \hline 7 \end{array}$	$\begin{array}{r} 6 \\ + \bigcirc \\ \hline 7 \end{array}$
$\begin{array}{r} 3 \\ + 4 \\ \hline \bigcirc \end{array}$	$\begin{array}{r} 4 \\ + \bigcirc \\ \hline 6 \end{array}$	$\begin{array}{r} \bigcirc \\ + 3 \\ \hline 6 \end{array}$	$\begin{array}{r} 1 \\ + \bigcirc \\ \hline 7 \end{array}$	$\begin{array}{r} \bigcirc \\ + 4 \\ \hline 7 \end{array}$	$\begin{array}{r} 2 \\ + 4 \\ \hline \bigcirc \end{array}$	$\begin{array}{r} 1 \\ + \bigcirc \\ \hline 7 \end{array}$
$\begin{array}{r} 4 \\ + 3 \\ \hline \bigcirc \end{array}$	$\begin{array}{r} 5 \\ + \bigcirc \\ \hline 7 \end{array}$	$\begin{array}{r} 6 \\ + 1 \\ \hline \bigcirc \end{array}$	$\begin{array}{r} \bigcirc \\ + 5 \\ \hline 7 \end{array}$	$\begin{array}{r} \bigcirc \\ + 0 \\ \hline 7 \end{array}$	$\begin{array}{r} 2 \\ + 4 \\ \hline \bigcirc \end{array}$	$\begin{array}{r} 3 \\ + \bigcirc \\ \hline 7 \end{array}$
$\begin{array}{r} \bigcirc \\ + 2 \\ \hline 6 \end{array}$	$\begin{array}{r} 3 \\ + 4 \\ \hline \bigcirc \end{array}$	$\begin{array}{r} 1 \\ + \bigcirc \\ \hline 7 \end{array}$	$\begin{array}{r} 2 \\ + 3 \\ \hline \bigcirc \end{array}$	$\begin{array}{r} 2 \\ + \bigcirc \\ \hline 7 \end{array}$	$\begin{array}{r} \bigcirc \\ + 3 \\ \hline 7 \end{array}$	$\begin{array}{r} 5 \\ + 1 \\ \hline \bigcirc \end{array}$
$\begin{array}{r} \bigcirc \\ + 5 \\ \hline 7 \end{array}$	$\begin{array}{r} 5 \\ + \bigcirc \\ \hline 7 \end{array}$	$\begin{array}{r} 4 \\ + 3 \\ \hline \bigcirc \end{array}$	$\begin{array}{r} 4 \\ + 2 \\ \hline \bigcirc \end{array}$	$\begin{array}{r} 2 \\ + \bigcirc \\ \hline 5 \end{array}$	$\begin{array}{r} \bigcirc \\ + 4 \\ \hline 7 \end{array}$	$\begin{array}{r} 3 \\ + 3 \\ \hline \bigcirc \end{array}$