

DRILL 7.1

Time: _____ Number Correct: _____ /16

Name: _____

DICTATE

A





7	4	2	8
---	---	---	---

B

9	5	3	6
---	---	---	---

COUNTING DOTS

C

			
8	5	7	6

NUMBER LINE

D

2	3	4	5	6
---	---	---	---	---

AFTER NUMBERS

E

5	6	8	9
---	---	---	---

DRILL 7.2

Time: _____ Number Correct: _____ /16

Name: _____

DICTATE

A





5	8	2	9
---	---	---	---

B

7	4	6	3
---	---	---	---

COUNTING DOTS

C

			
7	5	8	6

NUMBER LINE

D

3	4	5	6	7
---	---	---	---	---

AFTER NUMBERS

E

8	9	5	6
---	---	---	---

DRILL 7.3

Time: _____ Number Correct: _____ /16

Name: _____

DICTATE

A





6	9	3	5
---	---	---	---

B

2	7	4	8
---	---	---	---

COUNTING DOTS

C

			
6	8	7	5

NUMBER LINE

D

4	5	6	7	8
---	---	---	---	---

AFTER NUMBERS

E

5	6	8	9
---	---	---	---

DRILL 7.4

Time: _____ Number Correct: _____ /16

Name: _____

DICTATE

A





8	3	6	4
---	---	---	---

B

2	7	9	5
---	---	---	---

COUNTING DOTS

C

			
5	8	7	6

NUMBER LINE

D

5	6	7	8	9
---	---	---	---	---

AFTER NUMBERS

E

8	9	5	6
---	---	---	---

DRILL 17.1

Time: _____ Number Correct: _____ /24

Name: _____

NUMBER LINE



MATH FACTS

	2	0	1	1	2	3	4
	+1	+5	+3	+1	+3	+0	+1
B	$\overline{3}$	$\overline{5}$	$\overline{4}$	$\overline{2}$	$\overline{5}$	$\overline{3}$	$\overline{5}$

	0	3	2	2	2	1	4
	+4	+2	+1	+0	+2	+2	+0
C	$\overline{4}$	$\overline{5}$	$\overline{3}$	$\overline{2}$	$\overline{4}$	$\overline{3}$	$\overline{4}$

	2	0	2	5	1	0	3
	+2	+3	+3	+0	+4	+2	+1
D	$\overline{4}$	$\overline{3}$	$\overline{5}$	$\overline{5}$	$\overline{5}$	$\overline{2}$	$\overline{4}$

DRILL 17.2

Time: _____ Number Correct: _____ /24

Name: _____

COUNTING BACKWARDS



MATH FACTS

	2	5	2	3	2	0	3
	+3	+0	+2	+0	+1	+2	+1
B	$\overline{5}$	$\overline{5}$	$\overline{4}$	$\overline{3}$	$\overline{3}$	$\overline{2}$	$\overline{4}$

	0	1	4	2	1	3	0
	+3	+1	+0	+3	+2	+2	+5
C	$\overline{3}$	$\overline{2}$	$\overline{4}$	$\overline{5}$	$\overline{3}$	$\overline{5}$	$\overline{5}$

	3	1	4	2	0	1	2
	+2	+3	+1	+2	+4	+4	+0
D	$\overline{5}$	$\overline{4}$	$\overline{5}$	$\overline{4}$	$\overline{4}$	$\overline{5}$	$\overline{2}$

DRILL 17.3

Time: _____ Number Correct: _____ /24

Name: _____

NUMBER LINE



MATH FACTS

	0	2	3	3	4	1	0
	+5	+3	+1	+0	+1	+1	+4
B	$\overline{5}$	$\overline{5}$	$\overline{4}$	$\overline{3}$	$\overline{5}$	$\overline{2}$	$\overline{4}$

	4	1	2	5	3	1	2
	+0	+4	+2	+0	+1	+2	+0
C	$\overline{4}$	$\overline{5}$	$\overline{4}$	$\overline{5}$	$\overline{4}$	$\overline{3}$	$\overline{2}$

	4	0	3	2	1	0	1
	+1	+3	+2	+1	+3	+2	+4
D	$\overline{5}$	$\overline{3}$	$\overline{5}$	$\overline{3}$	$\overline{4}$	$\overline{2}$	$\overline{5}$

DRILL 17.4

Time: _____ Number Correct: _____ /24

Name: _____

COUNTING BACKWARDS



MATH FACTS

	2	0	2	2	4	1	1
	+2	+3	+3	+1	+0	+3	+1
B	$\overline{4}$	$\overline{3}$	$\overline{5}$	$\overline{3}$	$\overline{4}$	$\overline{4}$	$\overline{2}$

	3	1	0	3	2	5	0
	+2	+2	+5	+1	+3	+0	+2
C	$\overline{5}$	$\overline{3}$	$\overline{5}$	$\overline{4}$	$\overline{5}$	$\overline{5}$	$\overline{2}$

	0	4	2	3	3	2	1
	+4	+1	+0	+2	+0	+2	+4
D	$\overline{4}$	$\overline{5}$	$\overline{2}$	$\overline{5}$	$\overline{3}$	$\overline{4}$	$\overline{5}$

