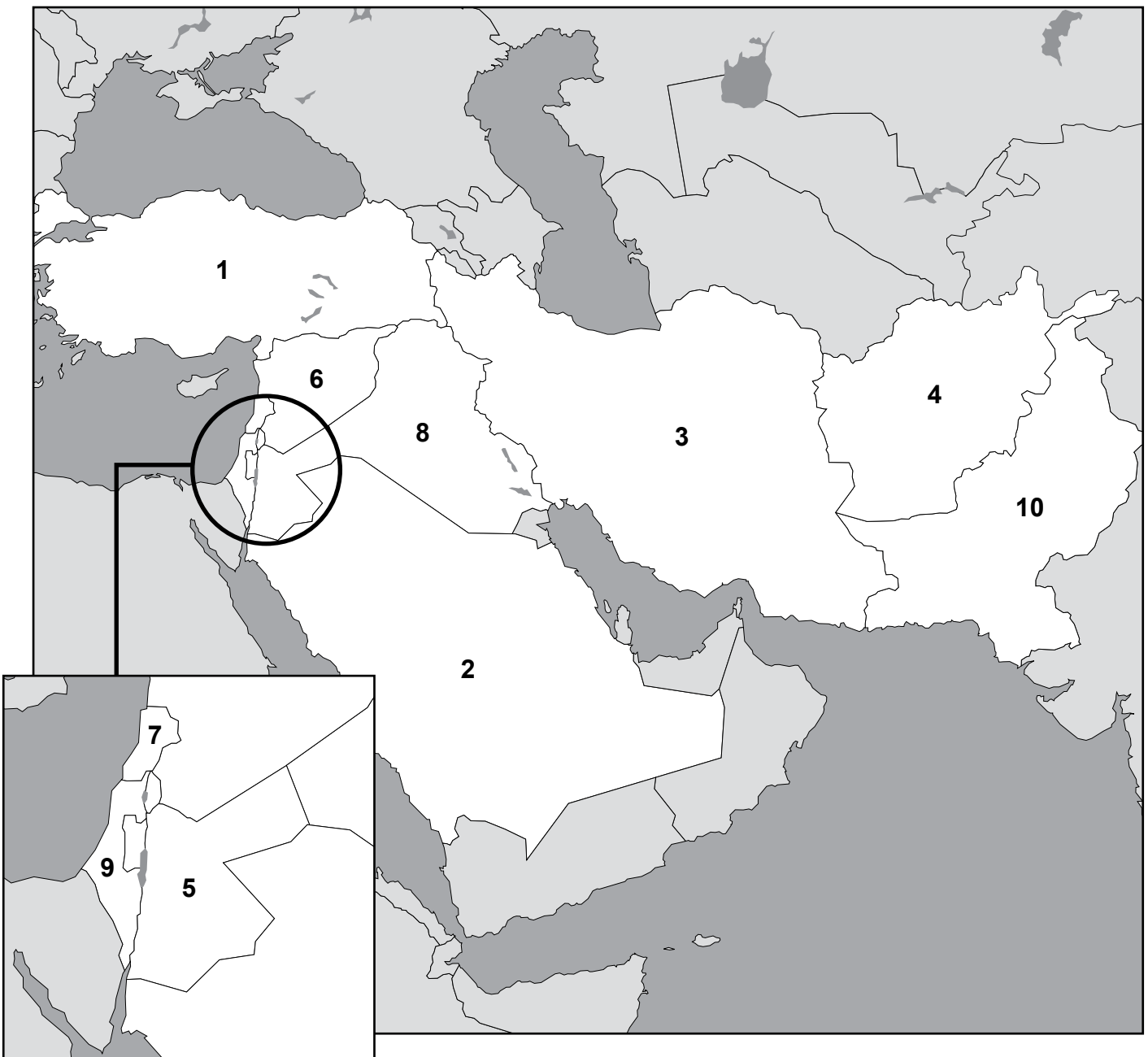


# MIDDLE EAST

## The Cradle of Civilization

Look at the map below. Identify each country.

- |          |           |
|----------|-----------|
| 1. _____ | 6. _____  |
| 2. _____ | 7. _____  |
| 3. _____ | 8. _____  |
| 4. _____ | 9. _____  |
| 5. _____ | 10. _____ |



# ISRAEL

---

---

Country: \_\_\_\_\_ Capital: \_\_\_\_\_

Ancient Name: \_\_\_\_\_

Fun Facts: \_\_\_\_\_

---

---

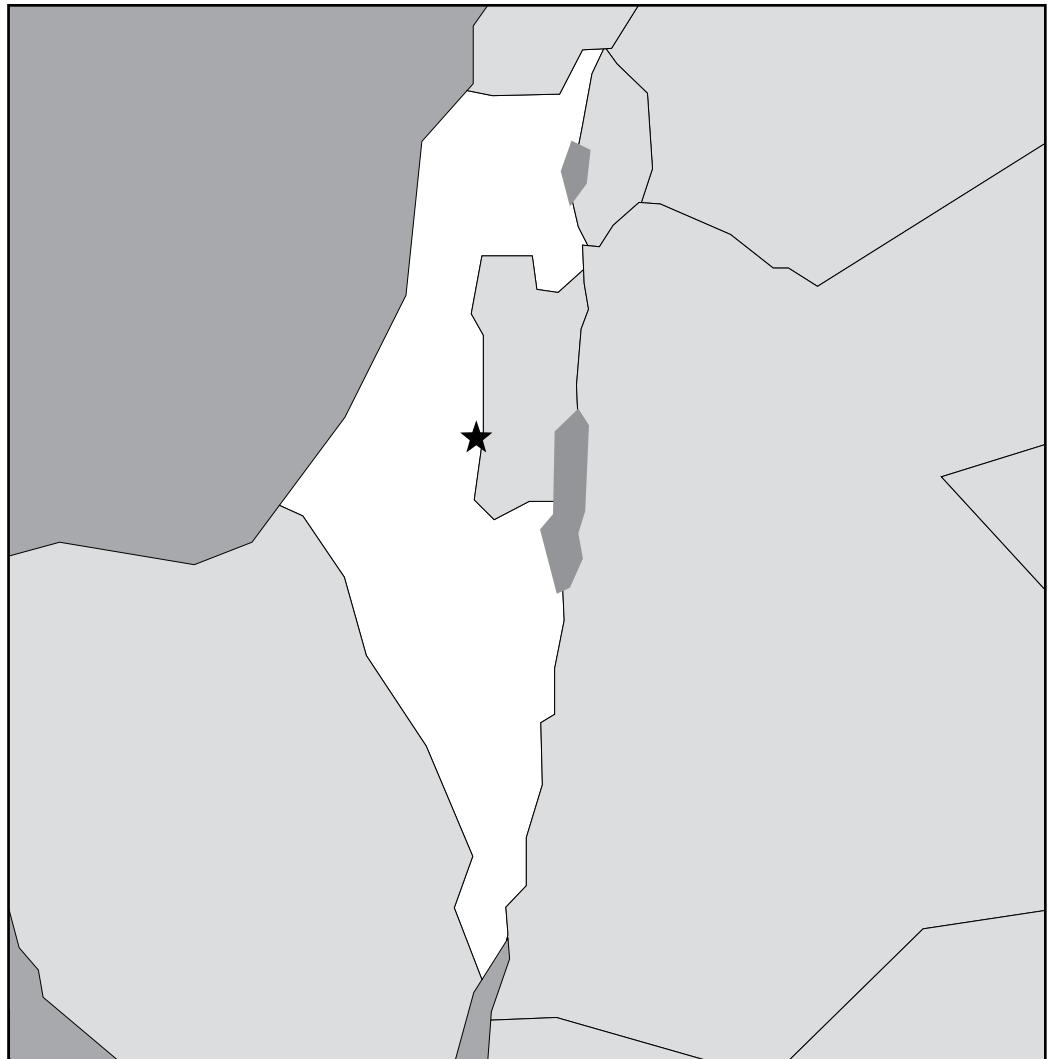
**Copy the names of the country and its capital below. Pay close attention to correct spelling.**

1. \_\_\_\_\_

2. \_\_\_\_\_

3. \_\_\_\_\_

**On the map to the right, label the capital city and major bodies of water and draw in major landforms.**



# JORDAN

---

---

Country: \_\_\_\_\_ Capital: \_\_\_\_\_

Ancient Name: \_\_\_\_\_

Fun Facts: \_\_\_\_\_

\_\_\_\_\_

\_\_\_\_\_

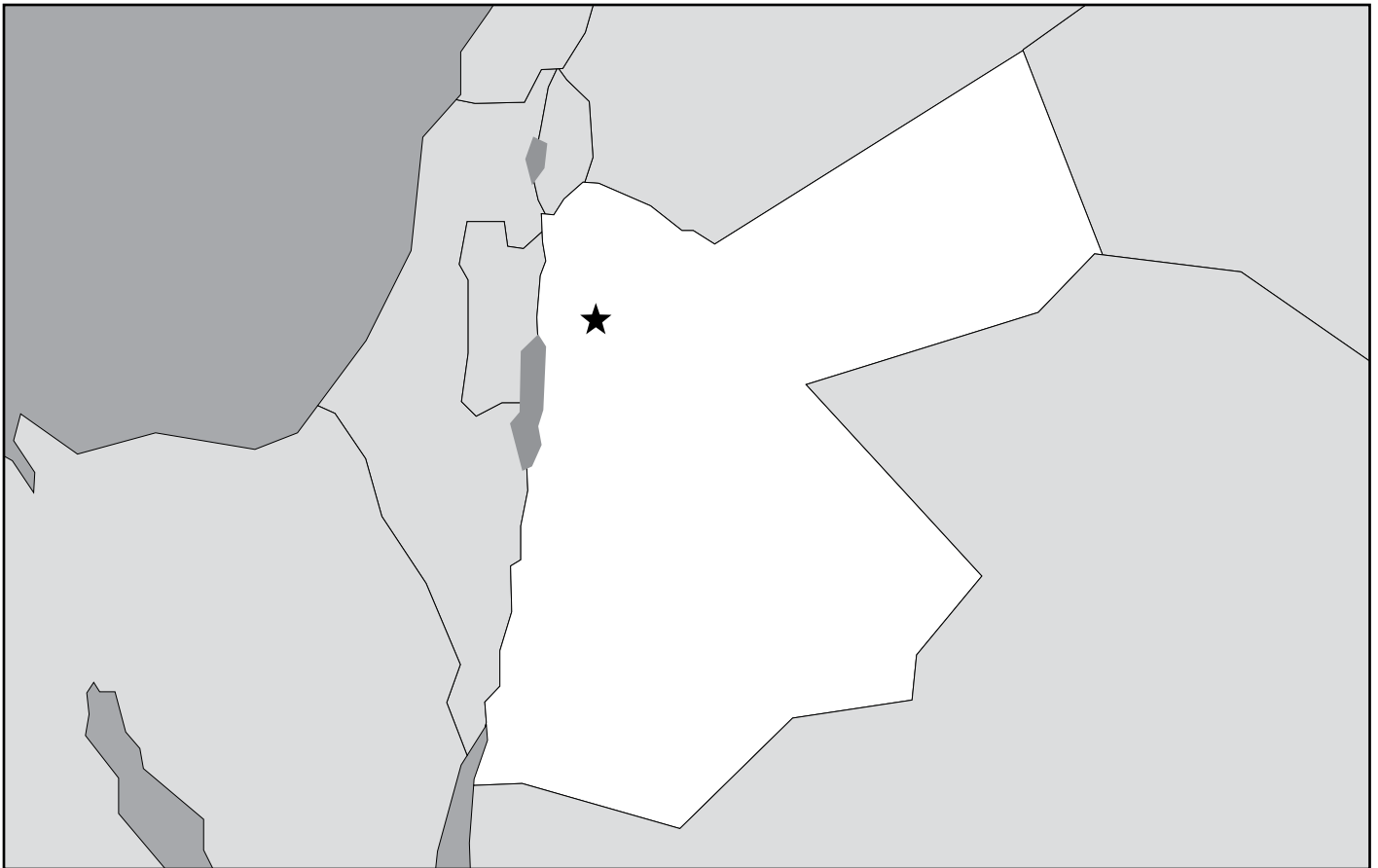
**Copy the names of the country and its capital below. Pay close attention to correct spelling.**

1. \_\_\_\_\_

2. \_\_\_\_\_

3. \_\_\_\_\_

**On the map below, label the capital city and major bodies of water and draw in major landforms.**



# SYRIA

---

---

Country: \_\_\_\_\_ Capital: \_\_\_\_\_

Ancient Name: \_\_\_\_\_

Fun Facts: \_\_\_\_\_

---

---

**Copy the names of the country and its capital below. Pay close attention to correct spelling.**

1. \_\_\_\_\_
2. \_\_\_\_\_
3. \_\_\_\_\_

**On the map below, label the capital city and major bodies of water and draw in major landforms.**

